

Week beginning 20.04.20

Monday - Friday

5 a day!



Complete the number bonds mentally:

$$1000 - 550 =$$

$$1000 - 920 =$$

$$1000 - 140 =$$

$$1000 - 155 =$$



$$3,800 \div 10 =$$

$$49,200 \div 100 =$$



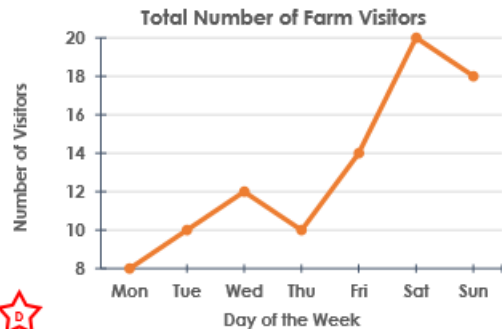
Circle the numbers that are a multiple of 6

23, 50, 48, 24,

67, 23, 30, 42



1a. When Jason visited the farm, there were 8 fewer visitors than there had been on Saturday. Which day did he visit the farm?



There are 167 sweets in the jar and 392 were added.

How many sweets are now in the jar?

5 a day!



Complete the number bonds mentally:

$$1000 - 235 =$$

$$1000 - 145 =$$

$$1000 - 927 =$$

$$1000 - 151 =$$



$$11,430 \div 10 =$$

$$313,700 \div 100 =$$

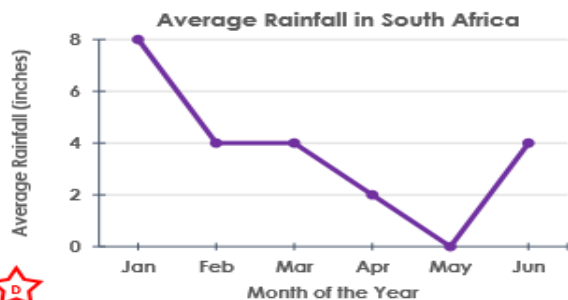


Circle the numbers that are a multiple of 11

43, 99, 78, 33,
88, 23, 110, 22



1b. When Jemimah visited South Africa, 4 more inches of rain fell than in June. Which month did she visit South Africa?



Jake has 263 football cards. His brother has 189.

How many more does Jake have?

5 a day!



Complete the number bonds mentally:

$$1000 - 336 =$$

$$1000 - 92 =$$

$$1000 - 365 =$$

$$1000 - 927 =$$



	$\div 10$	$\div 100$
73,000		
54,000		
28,000		



Circle the numbers that are a multiple of 8

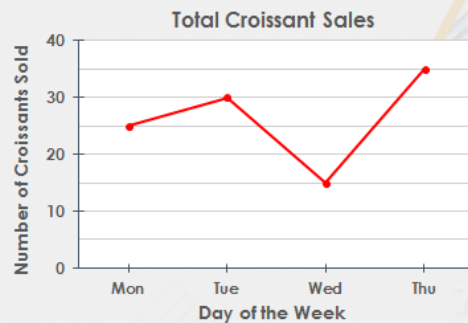
88 16 28 54

26 24 94 5



True or false?

More croissants were sold on Monday and Tuesday than on Wednesday and Thursday.



Jessie collects stamps. She has 351 in one box and 775 in another.

How many does she have altogether?

5 a day!



Complete the number bonds mentally:

$$1000 - 336 =$$

$$1000 - 658 =$$

$$1000 - 379 =$$

$$1000 - 75 =$$



$$965,000 \div 1,000 =$$

$$341,800 \div 100 =$$



Circle the numbers that are a multiple of 9

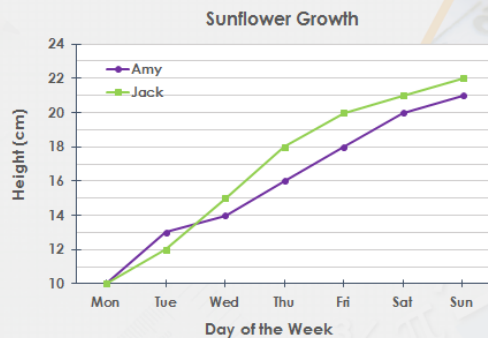
71 18 21 36

79 99 118 108



Complete the sentence.

Amy's sunflower was taller than Jack's on .



Jenny has £5.67. She spends £2.85 on a present for her brother.

How much money does she have left?

5 a day!



Complete the number bonds mentally:

$$1000 - 49 =$$

$$1000 - 444 =$$

$$1000 - 981 =$$

$$1000 - 516 =$$



	$\div 10$	$\div 100$	$\div 1,000$
3,000			
6,000			
44,000			

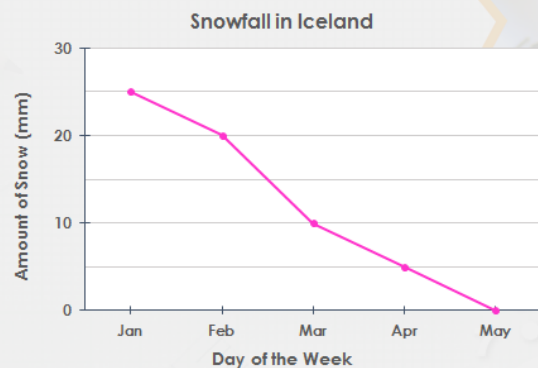


Circle the numbers that are a multiple of 7

35, 49, 42, 70,
63, 77, 21, 91



When Carli went to Iceland, there was 10mm more snow on average than in March. When did Carli go to Iceland?



Fred scored 76 goals in a season. 11 from headers and 7 with his left foot.

How many goals did he score with his right foot?