



5 a day!  
Week beginning 6.4.20

  $63 + \underline{\quad} = 100$

$76 + \underline{\quad} = 100$

$45 + \underline{\quad} = 100$

$12 + \underline{\quad} = 100$


  $45 \div 5 = \underline{\quad}$


$20 \div 5 = \underline{\quad}$


$35 \div 5 = \underline{\quad}$


$25 \div 5 = \underline{\quad}$

7b. Use the pictures to complete the statements.

A.  $\frac{1}{3}$  of 12 is  

B.  $\frac{1}{3}$  of  is 3 

C.  $\frac{1}{3}$  of 15 is  

 VF

Match the events to the approximate times they happen.  
Can you show the time on your clock?

|              |              |
|--------------|--------------|
| 9 o'clock    | Lunchtime    |
| Half past 10 | Go to school |
| 12 o'clock   | Home time    |
| Half past 3  | Playtime     |

What's my number?

I have 2 digits.  
My tens is the same as 4-3  
My ones digit is half of 6.  
What is my number?

5 a day!  
Week beginning 6.4.20



$34 + \underline{\quad} = 50$

$65 + \underline{\quad} = 80$

$24 + \underline{\quad} = 40$

$32 + \underline{\quad} = 50$



What time is it?



It is  past



$14 \div 2 =$

$12 \div 2 =$

$18 \div 2 =$

$8 \div 2 =$

Ron thinks he has £13



Is he correct?  
Explain your answer.

Find all the possible pairs of numbers  
that can complete the addition.

$$\begin{array}{r} \boxed{1} \boxed{\phantom{0}} \\ + \boxed{2} \boxed{\phantom{0}} \\ \hline \boxed{4} \boxed{2} \\ 1 \end{array}$$

E.g. 13+29

5 a day!  
Week beginning 6.4.20



$12+19=$

$16+27=$

$36+17=$

$29+13=$



$20 \div 10=$

$30 \div 10=$

$80 \div 10=$

$70 \div 10=$



$100-10=$

$100-30=$

$100-20=$

$100-80=$

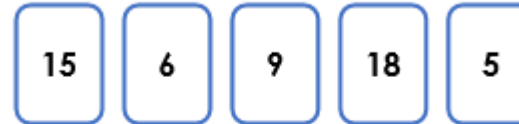


Oh no! The minute hand has fallen off the classroom clock!

Lunchtime is at 12:00

Have the children missed their lunchtime?

5a. Use the digit cards below to make the statements correct.



$\frac{1}{3}$  of  =

$\frac{1}{3}$  of  =



$34+ \underline{\quad} =50$

$65+ \underline{\quad} =80$



$14 \div 2=$

5 a day!  
Week beginning 6.4.20

$24 + \underline{\quad} = 40$

$32 + \underline{\quad} = 50$

What time is it?



It is  past

$12 \div 2 =$

$18 \div 2 =$

$8 \div 2 =$

Ron thinks he has £13



Is he correct?  
Explain your answer.

Find all the possible pairs of numbers  
that can complete the addition.

$$\begin{array}{r} 1 \square \\ + 2 \square \\ \hline 42 \\ 1 \end{array}$$

E.g. 13+29



$30 - 15 =$

$40 - 15 =$

$80 - 16 =$



$60 \div 10 =$

$30 \div 5 =$

$\div$



Half of 14 is

Half of 18 is

Half of 12 is

5 a day!  
Week beginning 6.4.20

$70-26=$

$12 \times 2=$

$55 \div 5=$

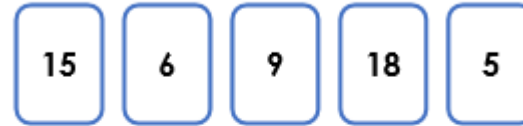


Oh no! The minute hand has fallen off the classroom clock!

Lunchtime is at 12:00

Have the children missed their lunchtime?

5a. Use the digit cards below to make the statements correct.



$\frac{1}{3}$  of  =

$\frac{1}{3}$  of  =