

5 a day!  
Week beginning 27.4.20



$65 + \underline{\quad} = 85$

$76 + \underline{\quad} = 86$

$43 + \underline{\quad} = 53$

$28 + \underline{\quad} = 58$



$45 \div 5 = \underline{\quad}$

$20 \div 5 = \underline{\quad}$


$35 \div 5 = \underline{\quad}$

$25 \div 5 = \underline{\quad}$




Show me two ways to make £5.12. Make sure you only use coins and notes.

Match each clock to the time it shows.



twenty-five past four



quarter to four

4b. Kara has spill on her pictogram.

● = 1 vote

Subject	
English	●●●●●●●●●●●●●●●●●●
Maths	● [spill]
Art	●●●●●●●●

Use the clues to work out how many chose Maths.

English was the most popular subject.  
At least 3 more chose Maths than Art.



5 a day!  
Week beginning 27.4.20



$34 + \underline{\quad} = 50$

$65 + \underline{\quad} = 80$

$24 + \underline{\quad} = 40$

$32 + \underline{\quad} = 50$



Half of 20 is

One quarter of 20 is

Three quarters of 20 is



$14 \div 2 =$

$12 \div 2 =$

$18 \div 2 =$

$8 \div 2 =$

Kemi goes to four clubs each week.

Which club lasts the longest?

Circle it.

**Swimming**

45 minutes

**Art**

2 hours

**Music**

75 minutes





**Drama**

1 hour

5b. True or false?

A. Oak trees are the least popular.

B. In total, there are 25 ash and oak trees.

Tree	 = 1 tree
Ash	
Oak	
Beech	

Explain your answers.

5 a day!  
Week beginning 27.4.20



$27+19=$

$15+27=$

$18+17=$

$37+13=$



$20 \div 10=$

$30 \div 10=$

$80 \div 10=$

$70 \div 10=$




$100-13=$

$100-35=$

$100-22=$

$100-82=$

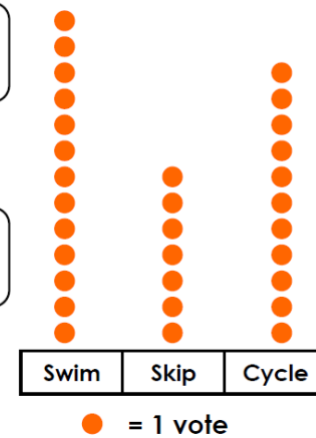


What time does the clock show?

6b. Who is correct? Explain your answer.

22 people like to swim or cycle.  
Lee

24 people like to swim or cycle.  
Aama



5 a day!  
Week beginning 27.4.20



$34 + \underline{\quad} = 60$

$65 + \underline{\quad} = 70$

$24 + \underline{\quad} = 50$

$32 + \underline{\quad} = 50$



What is one third of 12?



$14 \div 2 =$

$12 \div 2 =$

$18 \div 2 =$

$8 \div 2 =$

Shade  $\frac{3}{4}$  of this shape.



7b. Ted has spilt on his pictogram.

● = 1 vote

Minibeast	
Worm	
Spider	
Slug	

Use the clues to work out how many worms and spiders there could be.

There are 30 minibeasts in total.  
Spiders are most common and slugs are least common.



5 a day!  
Week beginning 27.4.20



$30-15=$

$40-15=$

$80-16=$

$70-26=$



$60 \div 10=$

$30 \div 5=$

$12 \div 2=$

$55 \div 5=$



Find one third of 18

Ben ate half a pizza.

Which fraction shows the amount he ate?



Circle it.

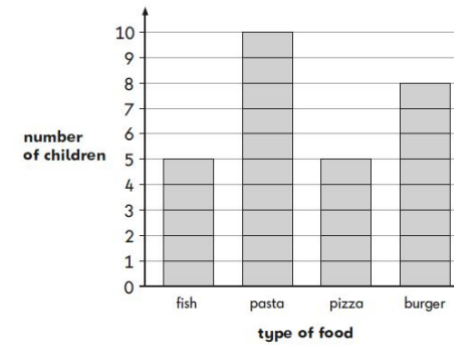
$\frac{1}{4}$

$\frac{1}{3}$

$\frac{2}{4}$

$\frac{3}{4}$

This chart shows what class 2 ate for lunch today.



Fewer children ate pizza than burger.

How many fewer?