

5 a day!



$$\begin{aligned}7 \times 2 &= \\3 \times 2 &= \\6 \times 2 &= \\9 \times 2 &= \\4 \times 2 &= \\8 \times 2 &= \\12 \times 2 &= \\5 \times 2 &= \end{aligned}$$



Add these fractions-

$$\begin{aligned}\frac{5}{12} + \frac{1}{12} &= \\ \frac{3}{12} + \frac{4}{12} &= \\ \frac{2}{15} + \frac{8}{15} &= \\ \frac{3}{20} + \frac{9}{20} &= \\ \frac{2}{11} + \frac{5}{11} &= \end{aligned}$$



Round these numbers to the nearest 1000-

458	2361
793	4732
1248	6174



Tick the statements that are true.

$422 - 990 = 568$	<input type="checkbox"/>
$422 + 568 = 990$	<input type="checkbox"/>
$422 = 568 - 990$	<input type="checkbox"/>
$422 = 990 - 568$	<input type="checkbox"/>



$33 \div 11 =$	$66 \div 11 =$
$44 \div 11 =$	$110 \div 11 =$
$143 \div 11 =$	$154 \div 11 =$
$77 \div 11 =$	$55 \div 11 =$
$22 \div 11 =$	$132 \div 11 =$
$88 \div 11 =$	$11 \div 11 =$
$121 \div 11 =$	$99 \div 11 =$

5 a day!



$5 \times 8 =$

$9 \times 8 =$

$3 \times 8 =$

$11 \times 8 =$

$4 \times 8 =$

$7 \times 8 =$

$6 \times 8 =$

$8 \times 8 =$



Subtract these fractions-

$$\frac{5}{12} - \frac{1}{12} =$$

$$\frac{11}{12} - \frac{1}{12} =$$

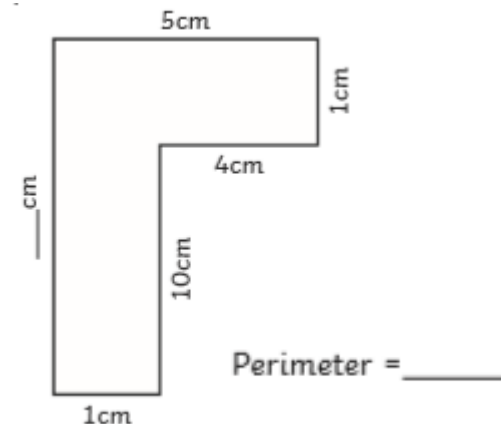
$$\frac{7}{12} - \frac{4}{12} =$$

$$\frac{13}{15} - \frac{7}{15} =$$

$$\frac{19}{20} - \frac{9}{20} =$$



Calculate the perimeter of this shape-



Complete the missing number to make this statement true.

$$568 + \boxed{} = 1,010$$



$40 \div 4 =$

$20 \div 4 =$

$12 \div 4 =$

$28 \div 4 =$

$24 \div 4 =$

$36 \div 4 =$

$32 \div 4 =$

$44 \div 4 =$

$48 \div 4 =$

$56 \div 4 =$

$8 \div 4 =$

$52 \div 4 =$

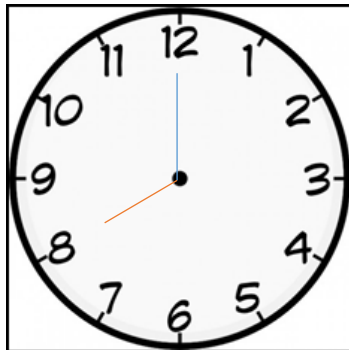
$16 \div 4 =$

$4 \div 4 =$

5 a day!



$$\begin{aligned}8 \times 9 &= \\3 \times 9 &= \\5 \times 9 &= \\9 \times 9 &= \\12 \times 9 &= \\4 \times 9 &= \\6 \times 9 &= \\10 \times 9 &= \end{aligned}$$



Write the time in digital 24 hour clock (It is evening time)



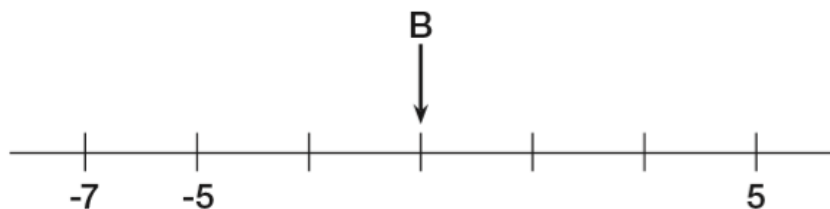
Complete the sequence

$$\frac{29}{100}, \frac{30}{100}, \frac{31}{100}, \boxed{}, \boxed{}$$



Here is a number line.

What number is B pointing to?



$$\begin{array}{ll}33 \div 3 = & 12 \div 3 = \\18 \div 3 = & 15 \div 3 = \\27 \div 3 = & 30 \div 3 = \\42 \div 3 = & 6 \div 3 = \\36 \div 3 = & 24 \div 3 = \\9 \div 3 = & 39 \div 3 = \\30 \div 3 = & 21 \div 3 = \end{array}$$

5 a day!



$8 \times 3 =$

$5 \times 3 =$

$7 \times 3 =$

$4 \times 3 =$

$12 \times 3 =$

$9 \times 3 =$

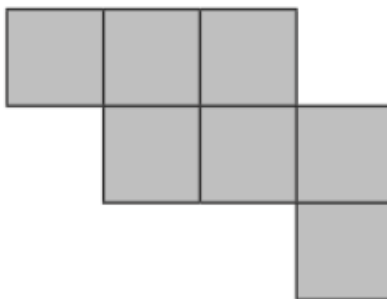
$3 \times 3 =$

$8 \times 3 =$



Here is a floor made of square tiles.

The area of each tile is 1 m^2 .



What is the total area of the floor?



Complete the sequence

0.6, 0.7, 0.8,

 , 

Solve these calculations using the column method-

$346 + 233 =$

$579 + 321 =$

$653 + 437 =$



$35 \div 7 =$

$21 \div 7 =$

$42 \div 7 =$

$14 \div 7 =$

$63 \div 7 =$

$28 \div 7 =$

$49 \div 7 =$

$70 \div 7 =$

$56 \div 7 =$

$77 \div 7 =$

$7 \div 7 =$

$84 \div 7 =$

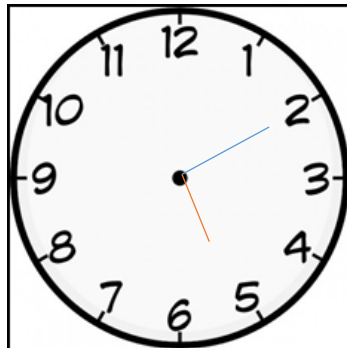
$91 \div 7 =$

$98 \div 7 =$

5 a day!



$$\begin{aligned}6 \times 11 &= \\11 \times 11 &= \\3 \times 11 &= \\9 \times 11 &= \\7 \times 11 &= \\4 \times 11 &= \\12 \times 11 &= \\8 \times 11 &= \end{aligned}$$



Tom's swimming lesson is at 6pm.
How long is it until his lesson?



Solve these calculations using the column method.

$$976 - 254 =$$

$$859 - 435 =$$

$$784 - 562 =$$



Complete the boxes.

18	rounded to the nearest 10 →	
----	--------------------------------	--

182	rounded to the nearest 10 →	
-----	--------------------------------	--

182	rounded to the nearest 100 →	
-----	---------------------------------	--



$$24 \div 2 =$$

$$18 \div 2 =$$

$$10 \div 2 =$$

$$4 \div 2 =$$

$$16 \div 2 =$$

$$14 \div 2 =$$

$$8 \div 2 =$$

$$22 \div 2 =$$

$$20 \div 2 =$$

$$12 \div 2 =$$

$$30 \div 2 =$$

$$26 \div 2 =$$

$$6 \div 2 =$$

$$2 \div 2 =$$