

Week beginning Monday 18<sup>th</sup> May

Monday 18<sup>th</sup> May



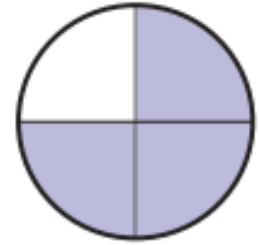
$$\begin{aligned}25 + 25 &= \\30 + 30 &= \\15 + 15 &= \\80 + 80 &= \\30 + 20 + 50 &= \end{aligned}$$



- a) How many seconds are there in 3 minutes?  
b) How many days are there in 4 weeks?  
c) How many days are there in May?



What fraction of the shape is shaded?



Put the  $<$ ,  $>$  or  $=$  sign between the following:

89      72      19      29


4  $\times$  5      10  $\times$  2



Complete the sequence by counting in 8s:

8    —    —    32    —    48    —    64    —

Tuesday 19th May



Share 24 chocolates between 4 children. How many do they get each?



Write these multiplication statements as division statements:

$$4 \times 4 = 16$$

$$7 \times 8 = 56$$

What fraction of this shape is shaded?



Use these numbers to write two multiplication statements and two division statements.

72            8            9



Complete the sequence by counting in 3s:

36    —    —    27    —    21    —    15    —

Wednesday 20th May



$9 \times 7 =$

$8 \times 5 =$

$12 \div 2 =$

$36 \div 4 =$

$8 \times 7 =$

$12 \times 6 =$



100 less than 150 is \_\_\_

100 less than 870 is \_\_\_

100 less than 320 is \_\_\_

100 less than 534 is \_\_\_

200 less than 940 is \_\_\_

250 less than 1000 is \_\_\_



Half of 220 =

Half of 90 =

Half of 46 =

Half of 350 =

Half of 34 =



What is the time? What is the time ten minutes later?



A t-shirt costs £24. It is now in a half price sale. How much will it cost?



Thursday 21st May



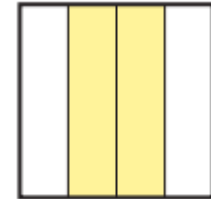
$$\begin{aligned}12 \div 4 &= \\35 \div 5 &= \\28 \div 4 &= \\24 \div 12 &= \\55 \div 11 &= \end{aligned}$$



What is the time?  
What is the time half an hour later?



What fraction of this shape is shaded?



Write in the missing sign:

$$33 \star 11 = 3$$

$$50 \star 25 = 70$$

$$24 = 3 \star 8$$



Complete the sequence by counting in 5s:

110 \_ \_ 95 \_ 85 \_ 75 \_

Friday 22nd May




$$\begin{aligned} 45 + \square &= 90 \\ 24 + \square &= 40 \\ 95 + \square &= 110 \\ 38 + \square &= 50 \end{aligned}$$



Divide 18 eggs into boxes of 6 eggs. How many boxes can I fill?



Colour this shape to show  $\frac{3}{4}$



Write these numbers in words:

214    113    119    69    240



There are 35 school days left until the half term holiday. How many weeks is it until half term?



